



Pirate Maths - count in 5s

The pirate needs to get back to his ship. Draw the path to the pirate ship starting at 5 and counting by 5s up to 500.

435	440	445	450	485	490	495			
430	425	420	455	480	475	500			
395	400	415	460	465	470				
390	405	410	355	350	345	310			
385	380	375	360	335	340	315	300	295	280
50	55	370	365	330	325	320	265	270	275
45	60	65	70	75	80	255	260	235	230
40	25	20	15	90	85	250	245	240	225
35	30		10	95	140	145	150	155	220
			5	100	135	180	175	160	215
			110	105	130	185	170	165	210
			115	120	125	190	195	200	205

Spelling Words

Write an interesting sentence for each of your spelling words.

Try to write a compound or complex sentence that links 2 ideas.

e.g. *I went to the mall to buy a present because I was going to Tim's party.*

Online activities: Mathletics, Study Ladder, Sumdog & Reading Eggs have all been set up to help you with your learning. Login and play!

Reading Log

Keep up your daily reading log - write down how many pages you read each evening.




Date	Title
Mon	
Tues	
Wed	
Thurs	


From the teacher:

- **Class photos** will be on Wednesday, so make sure you look your best.
- Keep exploring the **Reading Eggs** website (This free trial will last until 24th March). There are lots of books and activities for the children to enjoy.
- **Chocolates:** The last day to return money and unsold chocolates is Friday 24 March to be eligible for prizes. Please return any unsold chocolates so they can be distributed to other sellers.

Thank you!

from Mr Darkens


Mathematics***Telling the Time***

















Write the time for each clock face.

You may use words - **o'clock**, **half past** or numbers: 3.00, 4.30, 16:00, 13.30
How do we show morning or afternoon times?

What do **a.m.** and **p.m.** stand for?